

Closing today: HW_6A,6B,6C (7.5, 7.7)
Closing next Wed: HW_7A,7B,7C, (7.8, 8.1)
Exam 2 is Thurs, May 18th (6.4,6.5,7.1-7.8,8.1)
Office Hours Today: 1:30-3:00pm Smith 309.

7.7 Approximating Integrals:

Despite our best efforts in 7.1-7.5, the vast majority of integrals CANNOT be done with any of our methods.

To approximate $\int_a^b f(x)dx$

1. Pick **n = number of subdivisions.**

$$\text{Compute } \Delta x = \frac{b-a}{n}.$$

2. Label the tick marks: $x_i = a + i\Delta x$
3. Use one of these:

$$L_n = \Delta x [f(x_0) + f(x_1) + \cdots + f(x_{n-1})] \quad (\text{Left endpoint})$$

$$R_n = \Delta x [f(x_1) + f(x_2) + \cdots + f(x_n)] \quad (\text{Right endpoint})$$

$$M_n = \Delta x [f(\bar{x}_1) + f(\bar{x}_2) + \cdots + f(\bar{x}_n)] \quad (\text{Midpoint})$$

New - Trapezoid Rule: (all the “middle terms” are multiplied by 2)

$$T_n = \frac{1}{2} \Delta x [f(x_0) + 2f(x_1) + \cdots + 2f(x_{n-1}) + f(x_n)]$$

New - Simpson's Rule: n must be even! (Alternating multiplying middle terms by 4 and 2)

$$S_n = \frac{1}{3} \Delta x [f(x_0) + 4f(x_1) + 2f(x_2) + 4f(x_3) + \cdots + 2f(x_{n-2}) + 4f(x_{n-1}) + f(x_n)]$$

Entry Task: Use $n = 3$ and the trapezoid rule to approximate:

$$\int_0^3 \sqrt{100 - x^3} dx$$

Example:

(Note: None of our methods can integrate this)

Estimate $\int_0^3 \sqrt{100 - x^3} dx$

$$L_3 = (1) \left[\sqrt{100 - (0)^3} + \sqrt{100 - (1)^3} + \sqrt{100 - (2)^3} \right] \approx 29.5415$$

$$R_3 = (1) \left[\sqrt{100 - (1)^3} + \sqrt{100 - (2)^3} + \sqrt{100 - (3)^3} \right] \approx 28.0855$$

$$M_3 = (1) \left[\sqrt{100 - (0.5)^3} + \sqrt{100 - (1.5)^3} + \sqrt{100 - (2.5)^3} \right] \approx 29.0091$$

NEW – Trapezoid rule with $n = 3$.

$$T_3 = \frac{1}{2} (1) \left[\sqrt{100 - (0)^3} + 2\sqrt{100 - (1)^3} + 2\sqrt{100 - (2)^3} + \sqrt{100 - (3)^3} \right] \approx 28.8135$$

NEW – Simpson's rule with $n = 6$ (n must be even)

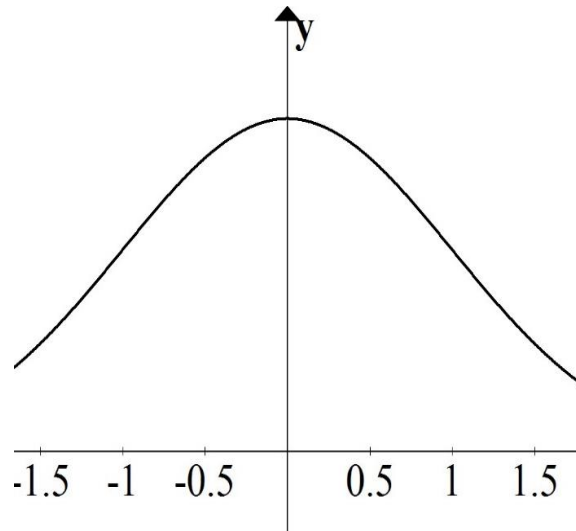
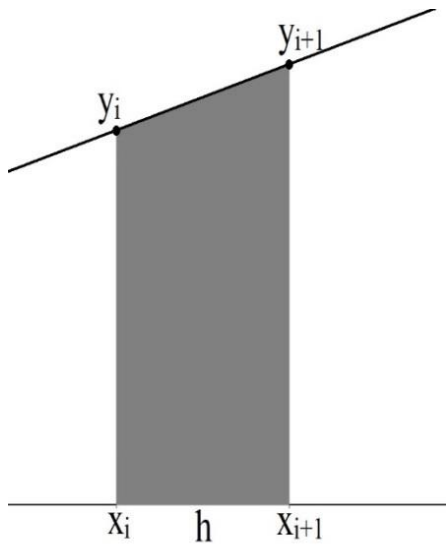
$$S_6 = \frac{1}{3} \cdot \frac{1}{2} \left[\sqrt{100 - (0)^3} + 4\sqrt{100 - (0.5)^3} + 2\sqrt{100 - (1)^3} + 4\sqrt{100 - (1.5)^3} \right. \\ \left. + 2\sqrt{100 - (2)^3} + 4\sqrt{100 - (2.5)^3} + \sqrt{100 - (3)^3} \right] \approx 28.9441$$

“Actual” Value (to 8 places after the decimal): 28.94418784

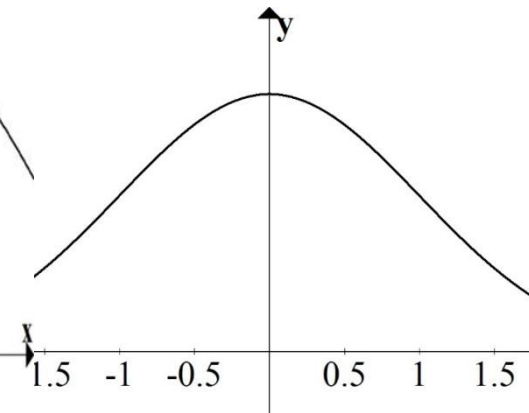
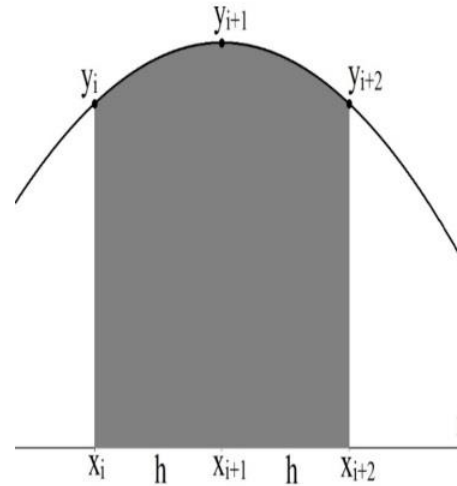
7.7 Quick Derivation Notes

Trapezoid Rule:

$$\text{Shaded Area} = \frac{h}{2}(y_i + y_{i+1})$$



Simpson's Rule: If the curve below is a **parabola** ($y = ax^2 + bx + c$) that goes through the three indicated points, then
Shaded Area = $\frac{h}{3}(y_i + 4y_{i+1} + y_{i+2})$



Example: With $n = 4$, use both new methods to approximate (just set up)

$$\frac{1}{\sqrt{2\pi}} \int_{-1}^1 e^{-\frac{1}{2}x^2} dx$$

$$\frac{1}{2} \Delta x [f(x_0) + 2f(x_1) + 2f(x_2) + 2f(x_3) + f(x_4)]$$

=

$$\frac{1}{3} \Delta x [f(x_0) + 4f(x_1) + 2f(x_2) + 4f(x_3) + f(x_4)]$$

=

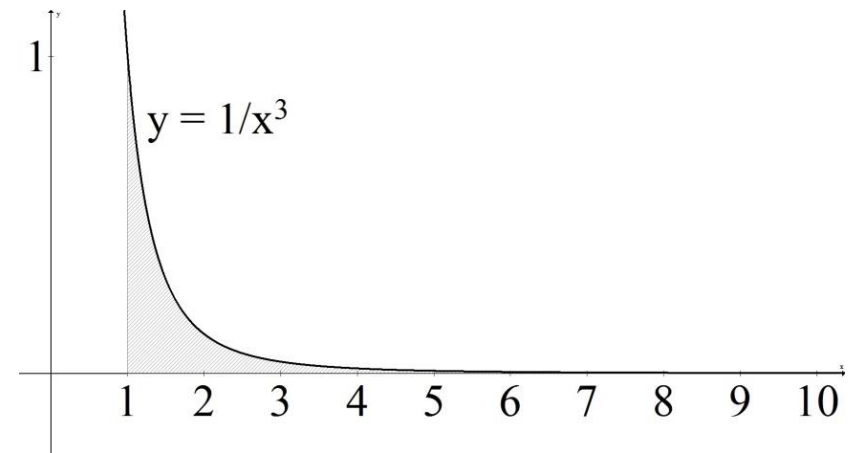
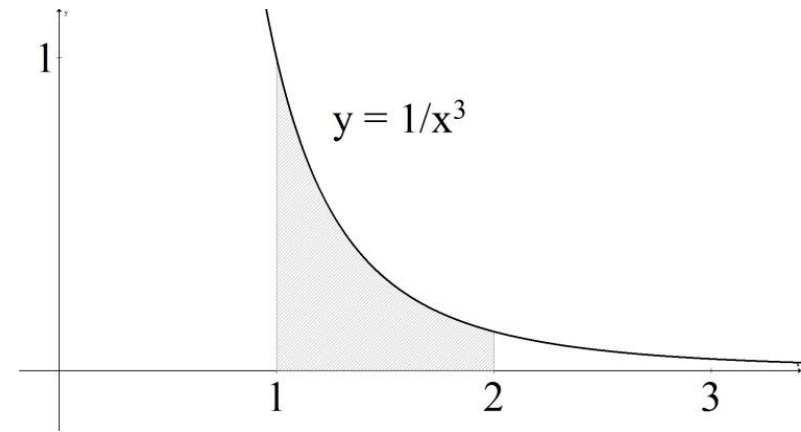
7.8 Improper Integrals

Motivation:

Consider the function $f(x) = \frac{1}{x^3}$.

Come the area under this function from...

1. $x = 1$ to $x = t$
2. $x = 1$ to $x = 2$
3. $x = 1$ to $x = 100$



Def'n: *Improper type 1 -*

infinite integral of integration

$$\int_a^{\infty} f(x) dx = \lim_{t \rightarrow \infty} \int_a^t f(x) dx$$

$$\int_{-\infty}^b f(x) dx = \lim_{t \rightarrow -\infty} \int_t^b f(x) dx$$

If the limit exists and is finite, then we say the integral *converges*. Otherwise, we say it *diverges*.

Example:

$$1. \int_0^{\infty} \frac{1}{x^3} dx =$$

Example:

$$2. \int_{-1}^{\infty} e^{-2x} dx =$$

$$3. \int_1^{\infty} \frac{1}{x} dx =$$

Def'n:

$$\int_{-\infty}^{\infty} f(x)dx = \lim_{r \rightarrow -\infty} \int_r^0 f(x)dx + \lim_{t \rightarrow \infty} \int_0^t f(x)dx$$

In this case, we say it *converges* only if both limits separately exist and are finite.

$$3. \int_{-\infty}^{\infty} \frac{1}{1+x^2} dx$$

Def'n: *Improper type 2 -
infinite discontinuity*

If $f(x)$ has a discontinuity at $x = a$, then

$$\int_a^b f(x) dx = \lim_{t \rightarrow a^+} \int_t^b f(x) dx$$

If $f(x)$ has a discontinuity at $x = b$, then

$$\int_a^b f(x) dx = \lim_{t \rightarrow b^-} \int_a^t f(x) dx$$

If the limit exists and is finite, then we say the integral *converges*. Otherwise, we say it *diverges*.

Example:

$$1. \int_0^1 \frac{1}{\sqrt{x}} dx =$$

Example:

$$2. \int_0^2 \frac{x}{x-2} dx =$$

If $f(x)$ has a discontinuity at $x = c$ which is **between** a and b , then

$$\int_a^b f(x) dx = \lim_{r \rightarrow c^-} \int_a^r f(x) dx + \lim_{t \rightarrow c^+} \int_t^b f(x) dx$$

In this case, we say it *converges* only if both limits separately exist and are finite.

$$3. \int_0^{\pi} \frac{1}{\cos^2(x)} dx =$$

Limits Refresher

1. If stuck, plug in values “near” t .
2. Know your basic functions/values:

$$\lim_{t \rightarrow \infty} \frac{1}{t^a} = 0, \quad \text{if } a > 0.$$

$$\lim_{t \rightarrow \infty} \frac{1}{e^{at}} = 0, \quad \text{if } a > 0.$$

$$\lim_{t \rightarrow \infty} t^a = \infty, \quad \text{if } a > 0.$$

$$\lim_{t \rightarrow \infty} \ln(t) = \infty.$$

$$\lim_{t \rightarrow 0^+} \ln(t) = -\infty.$$

3. For indeterminate forms, use algebra and/or L'Hopital's rule

Examples:

$$\lim_{t \rightarrow 1} \frac{t^2 + 2t - 3}{t - 1} =$$

$$\lim_{t \rightarrow \infty} \frac{\ln(t)}{t} =$$

$$\lim_{t \rightarrow \infty} t^2 e^{-3t} =$$

Aside:

A few general notes on **comparison**:

Suppose you have two functions $f(x)$ and $g(x)$ such that $0 \leq g(x) \leq f(x)$ for all values.

(a) If $\int_1^{\infty} f(x) dx$ converges,
then $\int_1^{\infty} g(x) dx$ converges.

(b) If $\int_1^{\infty} g(x) dx$ diverges,
then $\int_1^{\infty} f(x) dx$ diverges.

You can verify that

$$\int_1^{\infty} \frac{1}{x^p} dx, \quad \text{converges for } p > 1.$$

$$\int_1^{\infty} e^{px} dx, \quad \text{converges for } p < 0.$$

And you can compare off of these to sometimes quickly tell if something is converging or diverging (without calculating anything)